
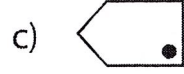
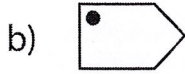



Multiple Choice


Choose the correct image which shows the transformation of each figure.


1) Reflection of  ?




2) Translation of  ?




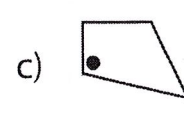
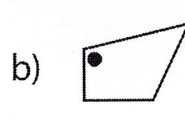
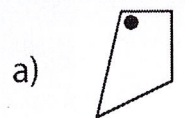
3) Rotation of  ?

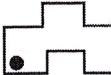


4) Reflection of  ?

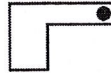


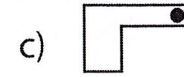

5) Translation of  ?




6) Rotation of  ?



7) Reflection of  ?



8) Translation of  ?

